






NAME _____ DATE _____

ADD OR SUBTRACT

See the example and do the remaining problems as given below.




Example:

Number of bulbs (10) =	
Number of blue bulbs (3) =	
Number of red bulbs (7) =	

$$\text{Number of red bulbs} = 10 - \underline{3} = 7$$




By observing the diagram do the following subtraction.

1)

Number of pencils (10) =	
Number of yellow pencils (4) =	
Number of green pencils (6) =	

$$\text{Number of green pencils} = 10 - \underline{\quad} = 6$$

2)

Number of pupils (10) =	
Number of girls (4) =	
Number of boys (6) =	

$$\text{Number of boys} = 10 - \underline{\quad} = 6$$